

DARSHAN ACADEMY

**SUMMER HOLIDAY
ASSIGNMENTS**

CLASS – IV

**HURRAY! IT'S TIME FOR FUN AND
PLAY.**

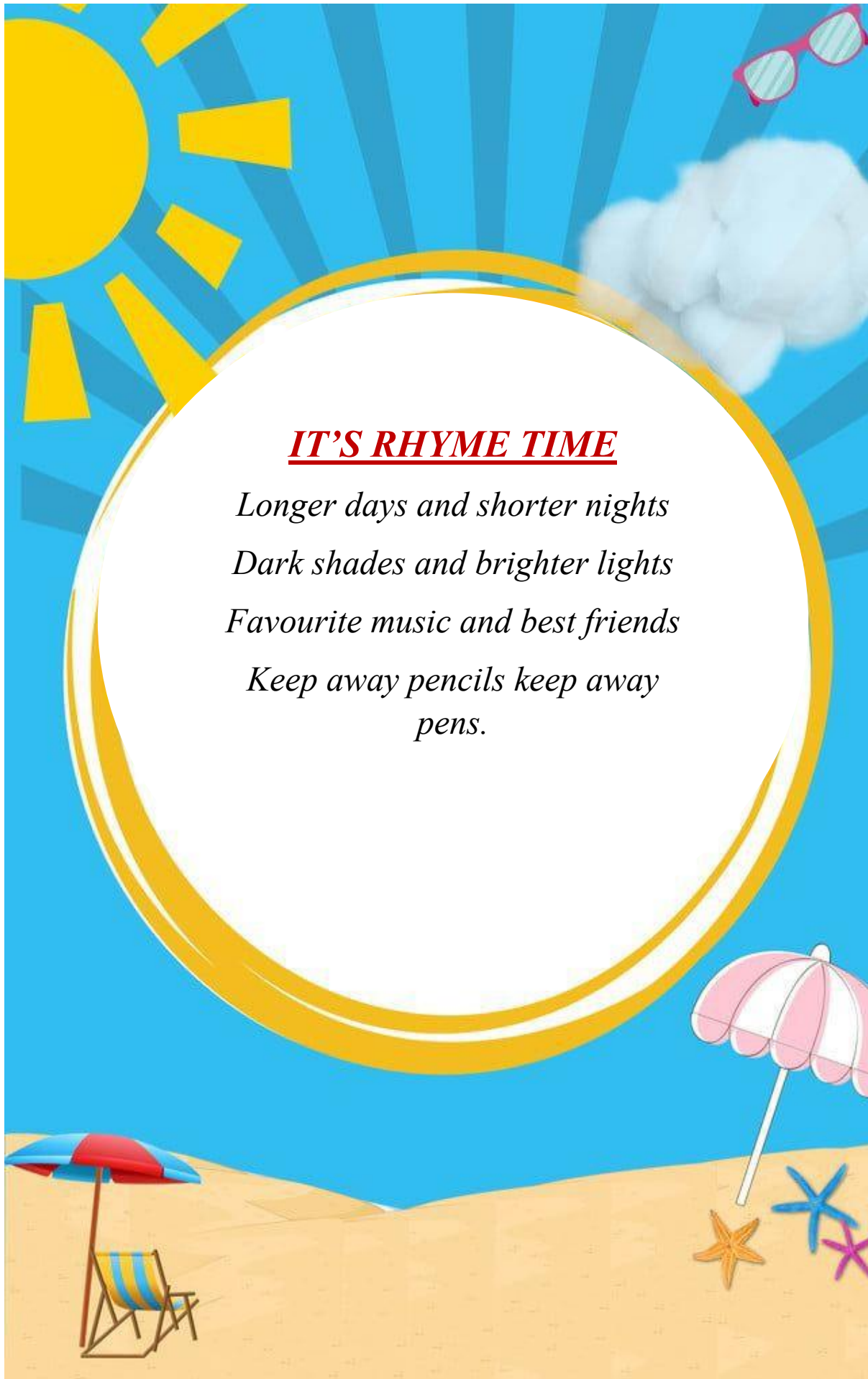
IT'S TIME FOR HOLIDAYS!!



Dear Parents,

Vacation is the time when you connect your child in many ways. As parents are the first and most important teacher for a child, you can encourage your child to participate in many educational activities at home and promote your child's quest to learn. Working together will not only help your child to build, learn and develop skills but also strengthen your bond with your child.





IT'S RHYME TIME

*Longer days and shorter nights
Dark shades and brighter lights
Favourite music and best friends
Keep away pencils keep away
pens.*

ENGLISH

- I. Look at the picture. It reminds us of a famous story in which all doves caught in a net make a united effort to fly in the sky along with the net.



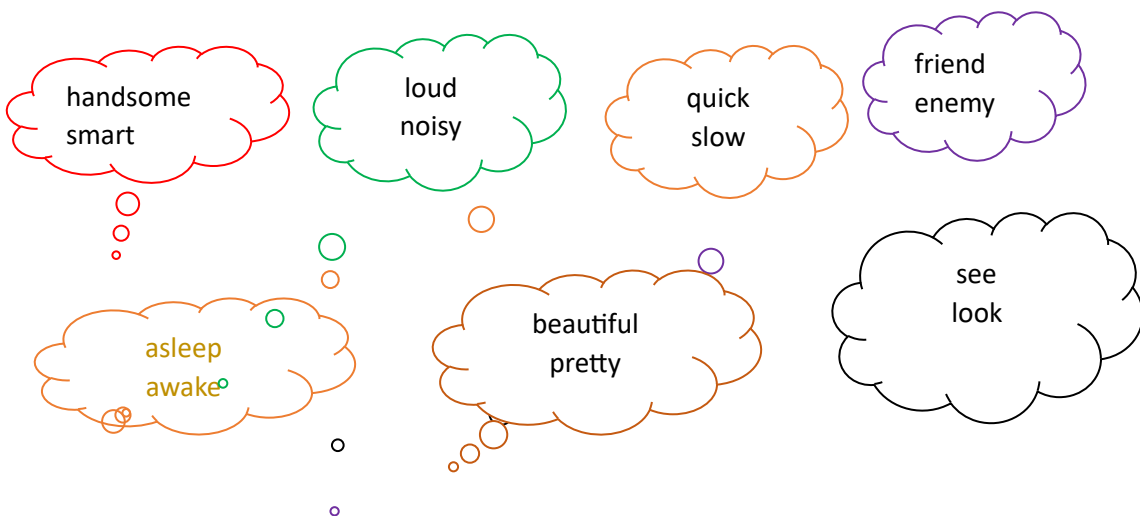
- a) Unscramble the letters to know the name of the story.

TUYIN / SI / GSRETNTH

- b) Frame a story in about 60-70 words based on the picture given above.


II. SKILL DRILL (SYNONYM AND ANTONYM)

Colour the boxes containing synonyms red and antonym purple.



III. Task to attend: -

- a. Make four flash cards of “Kinds of Sentences” (Roll no. 1- 11)
 - b. Make four flash cards of “Common Noun and Proper Noun” (Roll no. 12-22)
 - c. Make four flash cards of “Abstract Noun and Collective noun” (Roll no. 23-33)
- IV. “Every family has a story to tell.” So, write the most memorable moment spent with your family in your own words and paste the picture of that moment if it is possible to make it more creative.



- V. Read the newspaper regularly during holidays. You may utilize your noon time for this activity when you are at home. Cut two pictures per week from old newspapers. Paste them in a scrap file and give a catchy caption to each picture.

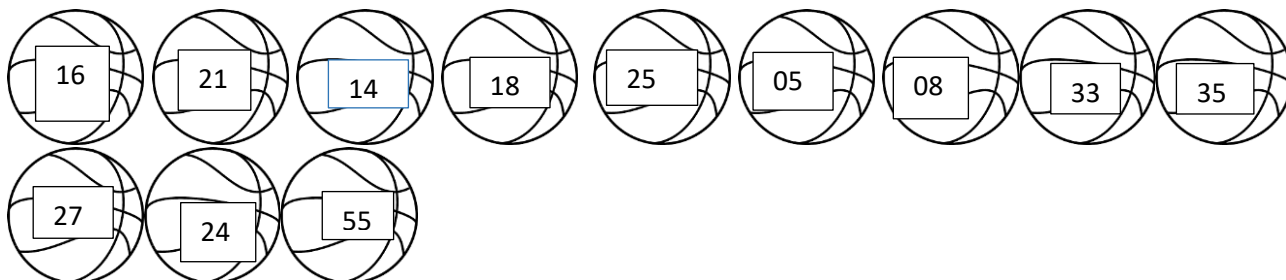


MATHS

I. COLOURING ACTIVITY

Colour the balls.

- Numbers divisible by two with **RED**.
- Number divisible by three with **GREEN**.
- Number divisible by five with **BLUE**.



II. PUZZLE ACTIVITY

Solve the following.

$$\triangle = 10 \quad \square = 12 \quad \bigcirc = 15 \quad \blacksquare = 17$$





- $\triangle + \triangle + \square = \underline{\hspace{2cm}}$
- $\triangle + \square + \bigcirc = \underline{\hspace{2cm}}$
- $\square + \bigcirc + \blacksquare = \underline{\hspace{2cm}}$
- $\triangle + \square + \bigcirc = \underline{\hspace{2cm}}$
- $\triangle + \bigcirc + \blacksquare = \underline{\hspace{2cm}}$
- $\bigcirc + \blacksquare + \blacksquare = \underline{\hspace{2cm}}$

III. CUT AND PASTE ACTIVITY

Make a scenery using cut-outs of plane shapes (circle, square, rectangle, oval, triangle).

IV. KNOWING OUR NUMBERS




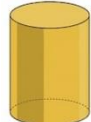

Read the table and write the cost of different items in words and also answer the questions given below: -

S. No.	Item	Cost (in Rs)	Number Name
1.	Air conditioner 	28,000	
2.	Washing machine 	29,580	
3.	Refrigerator 	52,699	
4.	Television 	65,340	

- Rohan bought a television and refrigerator. Find the money spent by him.
- Which one is costlier – an air conditioner or a washing machine and by how much?

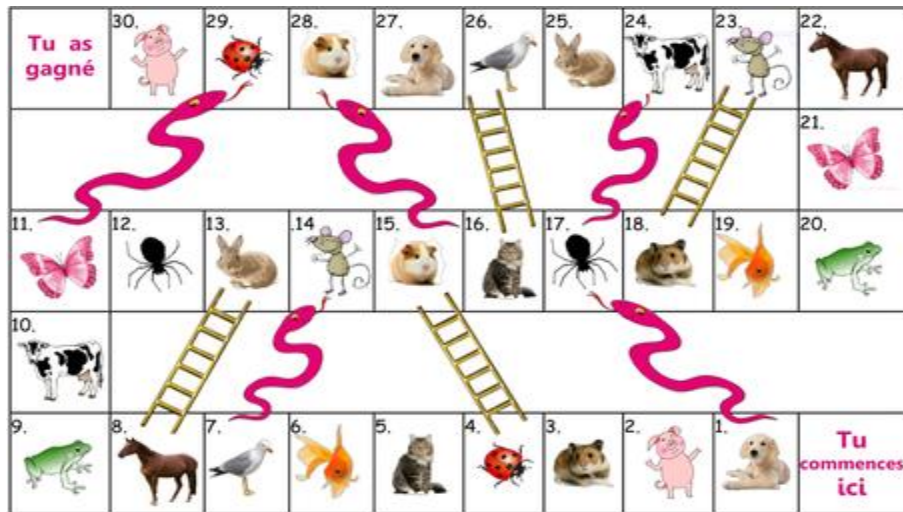
V. CLAY ACTIVITY

Make 3D shapes of the shapes given in the table using clay. Observe the 3-D shapes and complete the following table.

Sr. No.	Shape	Edge	Corner	Face
1.				
2.				
3.				
4.				
5.				

EVS

Q1. Make a **Board Game** using pictures of animals whose ears we can see and whose ears we cannot see.



Q2. In India, **Van Mahotsav** is celebrated every year in the first week of July.



Make a colourful poster on Van Mahotsav.

Q3. Madhubani is a very old form of folk art.



Make one table mat on A4 drawing sheet using Madhubani borders.

Q4. Riddles:



Guess who I am? Fill in the blanks with suitable answers. Draw pictures of the animals.

- A) I live in a beehive and lay eggs. I am _____.
- B) I guard the ant hole. I am _____.
- C) I live in a herd and take all the decisions for my group. I am _____.
- D) I am huge in size but extinct now. I am _____.
- E) I run very fast and wear horseshoes. I am _____.

Q5. Locate the following on a political map of India.

- A) A state famous for itr
- B) A state famous for Madhubani Paintings
- C) A state famous for khejadi trees

HINDI

- 1) पेड़ों की उपयोगिता बताते हुए पोस्टर बनाइए। पोस्टर को एक प्रभावशाली शीर्षक दीजिए व एक स्लोगन भी लिखिए।(A3 शीट पर लिखो)



- 2) नीचे तालिका में दी गई परिस्थितियों में आप कौन सी दो अच्छी बातें करते हैं? तालिका बनाकर A4 शीट पर लिखो।

कक्षा में	खाने की मेज पर	खेल के मैदान में	फोन पर

